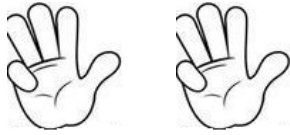



IME: \_\_\_\_\_


## VADIM SEŠTEVANJE


KOLIKO PRSTOV KAŽETA ROKI?


ZAPIŠI RAČUNE IN IZRAČUNAJ. GLEJ ZGLED.


  
 $\boxed{4} + \boxed{4} = \boxed{8}$


  
 $\boxed{\phantom{0}} + \boxed{\phantom{0}} = \boxed{\phantom{0}}$


  
 $\boxed{\phantom{0}} + \boxed{\phantom{0}} = \boxed{\phantom{0}}$

  
 $\boxed{\phantom{0}} + \boxed{\phantom{0}} = \boxed{\phantom{0}}$

  
 $\boxed{\phantom{0}} + \boxed{\phantom{0}} = \boxed{\phantom{0}}$

  
 $\boxed{\phantom{0}} + \boxed{\phantom{0}} = \boxed{\phantom{0}}$

  
 $\boxed{\phantom{0}} + \boxed{\phantom{0}} = \boxed{\phantom{0}}$

  
 $\boxed{\phantom{0}} + \boxed{\phantom{0}} = \boxed{\phantom{0}}$